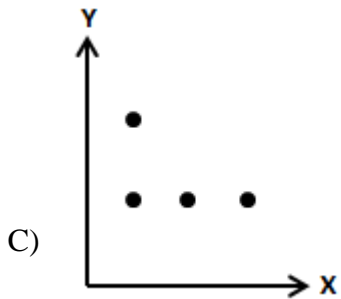
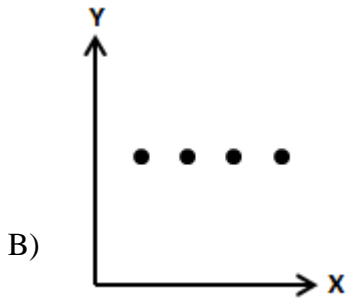
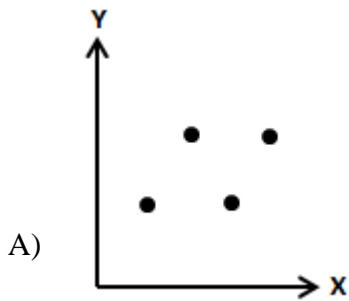


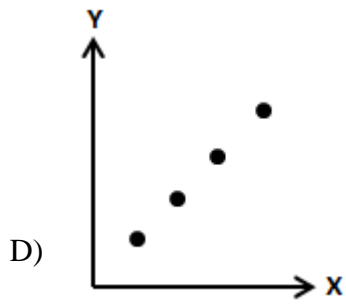
Convert Worksheet

Course: Lumos StepUp - PARCC Online Practice And Assessments - Grade 6 Mathematics

Which of the following graphs best represents the values in this table?

X	Y
1	1
1	2
2	1
3	1





Standard: 6.SP.B.4

Domain: Statistics & Probability

Theme: Summarize and describe distributions

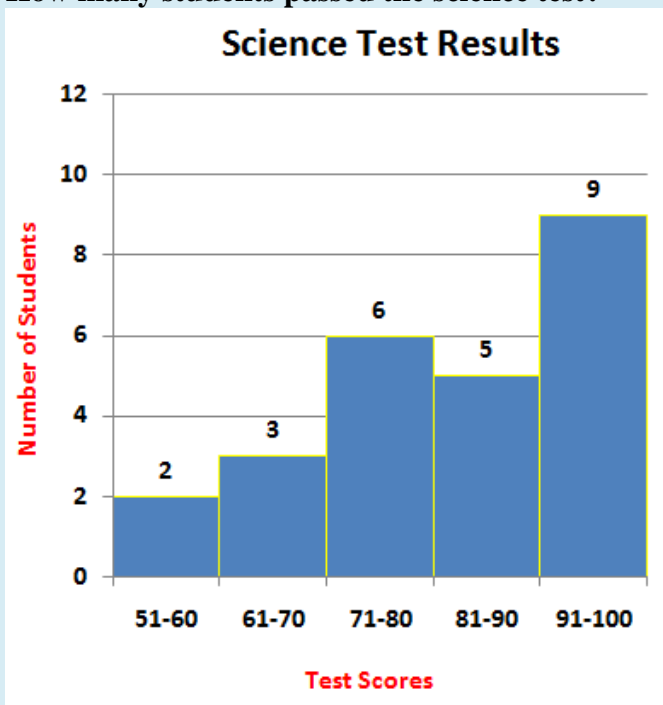
Description: Display numerical data in plots on a number line, including dot plots, histograms, and box plots.



Convert Worksheet

Course: Lumos StepUp - PARCC Online Practice And Assessments - Grade 6 Mathematics

The results of the class' most recent science test are displayed in this histogram. Use the results to answer the question. A "passing" score is a 61 or higher.  
How many students passed the science test?



- A) 3 students
- B) 20 students
- C) 23 students
- D) 25 students

Standard: 6.SP.B.4

Domain: Statistics & Probability

Theme: Summarize and describe distributions

Description: Display numerical data in plots on a number line, including dot plots, histograms, and box plots.

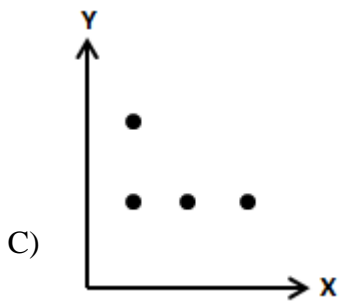
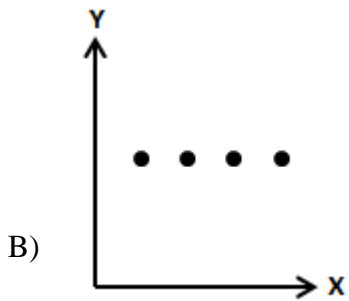
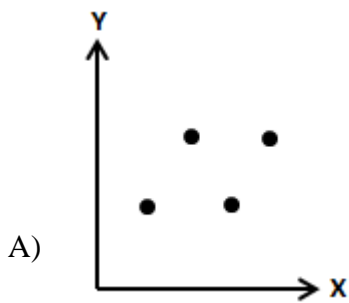


Convert Worksheet

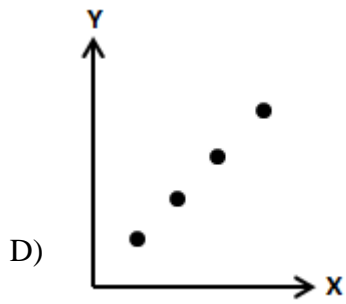
Course: Lumos StepUp - PARCC Online Practice And Assessments - Grade 6 Mathematics

Which of the following graphs best represents the values in this table?

X	Y
1	1
2	2
3	3
4	4







Standard: 6.SP.B.4

Domain: Statistics & Probability

Theme: Summarize and describe distributions

Description: Display numerical data in plots on a number line, including dot plots, histograms, and box plots.



